

1

# Location exercise for TOPOGRAPHICAL MAPS

Ⓐ FOUR POINT - grid reference identifies an entire square.

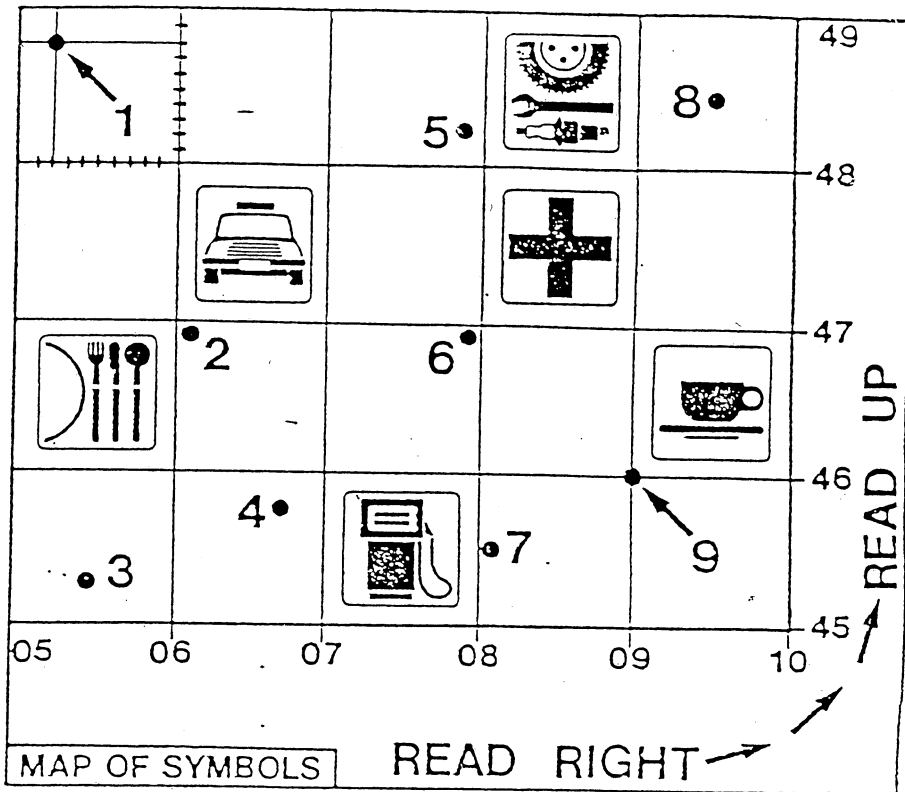
Sample. Locate 0747 and colour it red.

Solution. It is the square to the right of the line '07' and above the line '47'.

Ⓑ SIX POINT - grid reference identifies an exact point.

Sample. Locate point 1, and state its grid reference.

Solution. 052 488



## QUESTIONS.

R.F. → 1:50 000

① Give the 4 point grid reference for each.



05 46




06 47



07 45



08 48



08 47



09 46

② Give the 6 point grid reference for each.

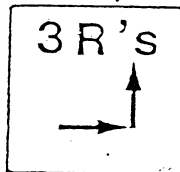
• 2 061 469 • 6 079 469

• 3 055 453 • 7 081 456

• 4 067 457 • 8 095 484

• 5 078 483 • 9 090 490

③ Describe the meaning of ;



Read Right, Read up,

④ Place a north arrow on the map.

⑤ Therefore, on ALL topographical maps ;

i) Vertical lines run north and south

ii) Horizontal lines run east and west